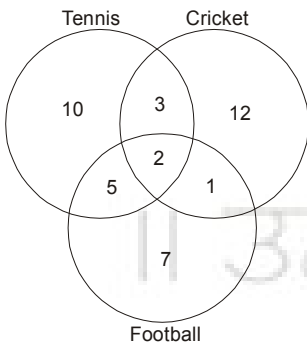


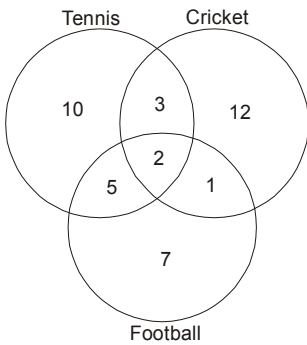
Nitin Bagade's

VIDYANIKETAN CLASSES

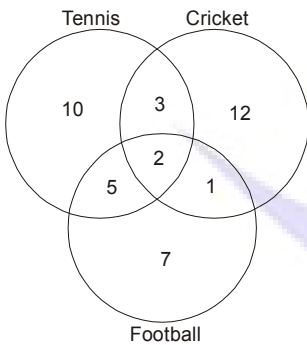
VENN DIAGRAM By : Darshan Tank



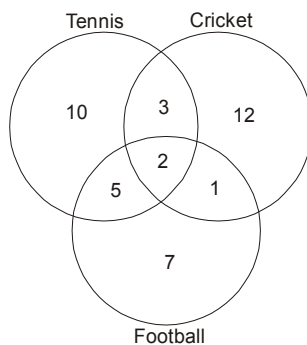
- 1) How many people can play cricket?
1) 12 2) 15 3) 17 4) 18
- 2) How many people can play only cricket?
1) 12 2) 15 3) 17 4) 18
- 3) How many people can play Tennis?
1) 10 2) 13 3) 15 4) 20
- 4) How many people can play only Tennis?
1) 10 2) 13 3) 15 4) 20



- 5) How many people can play only Football?
1) 7 2) 12 3) 15 4) 14
- 6) How many people can play Football?
1) 7 2) 12 3) 15 4) 14
- 7) How many people can play both Tennis as well as Cricket?
1) 10 2) 5 3) 25 4) 27
- 8) How many people can play both Tennis and Cricket?
1) 10 2) 3 3) 5 4) 13



- 9) How many people can play both Tennis as well as Football?
1) 10 2) 24 3) 5 4) 7
- 10) How many people can play both Tennis and Football?
1) 10 2) 24 3) 5 4) 7
- 11) How many people can play both Cricket as well as Football?
1) 2 2) 1 3) 3 4) 7
- 12) How many people can play both Cricket and Football?
1) 1 2) 2 3) 3 4) 20



- 13) How many people can play both Tennis as well as Football but can't play cricket?
1) 10 2) 2 3) 5 4) 7
- 14) How many people can play both Tennis as well as Cricket but can't play Football?
1) 3 2) 2 3) 5 4) 11
- 15) How many people can play both Cricket as well as Football but can't play Tennis?
1) 2 2) 1 3) 3 4) 7
- 16) How many people can play only one of the games?
1) 10 2) 12 3) 29 4) 2

- 17) How many people can play all three games?
1) 2 2) 1 3) 3 4) 7